

LT. COL. MEHAR LITTLE ANGELS SR. SEC. SCHOOL

WINTER HOLIDAY HOMEWORK (2024-25)

Class IV

ENGLISH:

- 1 **Gulmohar Reader**- Learn all the work done in class of Lesson 9 and 10 and poem 'Singing Secrets'.
- 2 **The Grammar Connect**- Practice all the exercises of Lesson 17, 18, 19 and 20.
- 3 Do the given worksheets (take out the printout of worksheet and bring it in A4 folder).
4. Describe the picture given below in few lines about the picture on A4 size sheet and paste the picture. Also write a title for your composition.

Colorful, cold, winter, carnival, gifts, happy, rides, sweets, lighting, snow, excited, family



WORKSHEET

Q1. Identify the modal verb used in each of the following sentences and write it down.

1. You must complete the project by Friday. _____
2. She can play the guitar really well. _____
3. We might go to the park if it doesn't rain. _____
4. I should study for the exam tonight. _____
5. He could speak three languages when he was young. _____
6. They will arrive at the birthday party at around 9 PM. _____
7. You may leave the class after submitting your assignment. _____
8. We shall overcome this challenge together. _____
9. You must not touch that, it's dangerous! _____
10. Would you like to join us for dinner? _____

Q2. Fill in the blanks with the correct modals

1. I _____ arrange the flowers for the bouquet. (may/can)
2. _____ I borrow this pen from you? (may/might)
3. The teacher _____ ask you to bring the homework. (might/can)
4. According to the weather forecast, it _____ snow heavily tomorrow. (may/shall)
5. Raj hasn't studied well. He _____ fail his exam. (might/shall)
6. You _____ follow the traffic rules. (may/must)
7. It _____ be difficult to live amidst war. (should/must)
8. My mother _____ scold me if I don't go back on time. (will/may)
9. We _____ take care of our parents. (ought to/ could)
10. I _____ visit the local grocery store soon. (shall/can)
11. You _____ be punctual. (should/ought)
12. One _____ repay all their debts. (must/ought to)
13. _____ you show me the road to the market? (could/might)
14. The child _____ be taken to hospital immediately. (must/might)
15. _____ you have hot chocolate? (shall/will)

Q3. Form adverbs from the given words.

ADJECTIVE	ADVERB
1. Angry	
2. Happy	
3. Merry	
4. Sleepy	
5. Easy	
6. Noisy	
7. Tidy	
8. Gloomy	
9. Cheap	
10. Probable	
11. Terrible	
12. Quick	

13. Gentle	
14. Tragic	
15. Lucky	

Q4. Underline the adverbs and mention their kinds.

1. I shall go tomorrow. _____
2. He is waiting outside. _____
3. Surbhi writes neatly. _____
4. India played well. _____
5. Look up in the sky. _____
6. The soldiers fought bravely. _____
7. We must leave tomorrow. _____
8. I heard the news recently that our holidays will begin on 31st December. _____
9. The student was waiting outside for the English teacher. _____
10. The boy is too careless. _____

Q5. Fill in the blanks with suitable adverb given in the bracket

neatly, fast, politely, always, usually, bitterly, often, slowly, yesterday, there

1. He runs very _____.
2. Jeet _____ comes on time.
3. The child cried _____.
4. The students spoke _____.
5. I went to the park _____.
6. Sit _____ and do your work.
7. The old man walked _____.
8. Vihaan _____ reads fairy tales.
9. We _____ go to park in the evening.
10. We should do our work _____.

Q6. Underline the prepositions in the given sentences

1. Keep the flowers on the table.
2. Tina is coming for dinner.
3. The bus is moving at full speed.
4. The baby is sleeping with his mother.
5. I am going to the garden.
6. There were two apples in the basket.
7. They divided the chocolates among themselves.
8. The villager was hit by a robber with a stick.

Q7. Fill in the blanks with appropriate prepositions from the help box.

From, by, on, at, to, into, by, besides

1. The baby sat _____ the floor.
2. Mayank jumped _____ the river to save the drowning child.
3. Travelling _____ air is no more costly.
4. The king fell _____ the horse.
5. We should not throw the stones _____ the animals.
6. I have no coin _____ help the beggar.
7. _____ singing, I also like to dance.
8. It is 5 a.m. _____ my watch.

Q8. Solve this crossword puzzle by finding the given words.



SPELLING

WORD SEARCH



X	T	N	I	A	F	G	K	T	D	I	A	R	F	A	B	V
N	E	X	I	U	F	M	Y	B	L	E	A	R	N	L	W	C
O	P	E	X	R	X	V	N	K	D	E	V	Q	G	R	T	K
J	P	G	D	N	R	A	E	F	E	N	S	L	V	A	H	S
X	I	I	G	P	G	R	A	S	R	G	S	T	F	E	G	N
E	Y	E	W	K	B	W	R	T	U	I	O	E	R	P	I	W
N	S	B	K	S	E	A	U	W	O	A	D	B	A	V	E	K
E	E	G	A	N	E	W	C	E	B	P	R	E	E	R	W	E
T	S	Z	I	H	F	H	S	F	H	M	A	E	I	Y	C	V
F	U	A	E	I	T	L	S	L	G	A	E	D	A	G	V	H
O	R	R	R	R	E	V	T	F	I	C	H	I	A	R	H	I
B	V	V	A	I	N	L	R	V	E	I	N	S	Y	U	L	T
T	E	E	G	T	F	R	A	H	N	H	G	O	W	N	G	A
K	Y	H	N	A	I	D	I	W	H	B	C	B	H	Z	G	M
Z	R	U	E	E	Q	H	G	B	Q	C	R	E	E	H	A	Q
N	N	N	W	U	F	R	H	F	C	Z	M	Y	Y	C	O	A
D	K	P	Y	J	N	J	T	L	A	U	T	C	A	M	V	E

EARL
FAINT
HEARD
OBEY
EIGHT

SEARCH
CAMPAIGN
EARTH
WHEY
NEIGHBOUR

EARN
STRAIGHT
WEIGHT
BEIGE
OFTEN

AFRAID
REHEARSE
DISOBEY
SLEIGH
LEARN

BRAIN
PEARL
SURVEY
VEIN
ACTUAL

हिन्दी:

1. सोन धरैया - पाठ 12, 13 और 14 के शब्द -अर्थ, वाक्य - बनाओ और प्रश्न -उत्तर दोहराओ ।
2. व्याकरण पुष्प - पाठ 10 , 11 , के अभ्यास - कार्य दोहराओ ।
3. दी गई कार्य परिकाएं कीजिए ।

कार्यपत्रिका-1

निम्न वाक्यों में कोष्ठक में से सही शब्द चुनकर खाली स्थान भरो -

1. बच्चा ————— झूल रहा है। (झूला / झूले)
2. रामू दिन में भी ————— देखता है। (सपना / सपने)
3. ————— गहरा नहीं था। (कुँआ / कुँए)
4. मेरे पास रबर के ————— हैं। (खिलौना / खिलौने)
5. ————— काँव काँव कर रहा था। (कौआ / कौए)
6. गमले में ————— लगाओ। (पौधा / पौधे)
7. मैदान में ————— घास चर रहा है। (घोड़ा / घोड़े)
8. ————— मेज़ पर रखी है। (किताब / किताबें)
9. ————— पेड़ पर बैठा है। (तोता / तोते)
10. बाहर ठंडी ————— चल रही है। (हवा / हवाएँ)
11. ————— पाठशाला चला गया। (लड़का / लड़के)
12. राम ————— पढ़ रहा है। (कहानी / कहानियाँ)
13. चूहा ————— कुतर गया। (कपड़ा / कपड़े)
14. आकाश में ————— उड़ रही हैं। (चिड़िया / चिड़ियाँ)

व्याकरण - गिनती

चौदह, बाईस, पच्चीस, इक्कीस, सत्ताईस,
सताइस, पन्द्रह, उनतीस, उन्नतीस
अठारह, उन्नीस, बारह, अठाईस, सत्रह,
नौ, छह, छः, ग्यारह, ग्यारह

प्रश्न- नीचे दिए गए खाली स्थानों पर सही गिनती चुनकर लगाएँ ।

14

27

22

11

25

19

21

18

29

12

9

28

6

17

सही सर्वनाम शब्द चुनिए-

1. रवि ----- (मेरा / उसने) दोस्त है।
2. ----- (वह / उसका) ठीक समय पर स्कूल जाता है।
3. अध्यापक ----- (उसने / उसे) प्यार करते हैं।
4. ----- (उसके / वह) पिता इंजिनियर हैं।
5. ----- (मैं / उसकी) माँ डॉक्टर हैं।
6. ----- (उन्होंने / उसका) घर बहुत बड़ा है।
7. ----- (हम / तुम) कल दिल्ली जाएँगे।
8. अभी ----- (मुझे / उसने) बाज़ार जाना है।
9. ----- (उसका / मैं) सिनेमा देख रहा हूँ।
10. ----- (तुम / हम) क्या कर रहे हो?

कार्यपत्रिका-4



पतंग

गुब्बारा

लड़कियाँ

इन्द्रधनुष

लड़के

रंग-बिरंगे

1. आसमान में सुंदर दिखाई दे रहा है ।
2. एक लड़की उड़ा रही है ।
3. दो रेत से खेल रही हैं और उनके पास ।
4. नीली कमीज़ पहनी लड़की के हाथ में पीला है ।
5. दो गेंद से खेल रहे हैं ।

MATHEMATICS:

ASSIGNMENT – 1

NAME: - _____

ROLL NO: - _____

1. Express in ml.

- a. 11 L
- b. 6 L
- c. 2 L

- d. 1 L 425 ml
- e. 7 L 148 ml
- f. 3 L

2. Express in liters.

- (a) 4000 ml
- (b) 1500 ml
- (c) 4500 ml

- (d) 5250 ml
- (e) 8750 ml
- (f) 13 L 236 ml

3. Write in the column form and find the sum of the following.

(a) 945 kg 5 g and 160 kg 75 g

(b) 780 kg 58 g and 271 kg 140 g

(c) 1225 kg 625 g and 325 kg 150 g

4. Write in the columns form and find the subtract of the following.

(a) 75 kg 100 g from 80 kg 90 g

(b) 28 kg 470 g from 39 kg 380 g

(c) 12 kg 325 g from 28 kg 760 g

5. Shruti bought 13 kg 500 g atta, 12 kg 250 g rice, and 8 kg dal. Find the total weight of things bought by her.

6. Rajat gained weight 5 kg 750 g. What was his earlier weight if he weighs 58 kg 225 g now?

ASSIGNMENT – 2

NAME: - _____

ROLL NO: - _____

1. Tick () the correct option.
 - A. To convert g into kg, we divide by
 - I. 100
 - II. 10000
 - III. 10
 - IV. 1000
 - B. $7000\text{g} = \underline{\hspace{2cm}}$ kg
 - I. 7
 - II. 70
 - III. 700
 - IV. 8
 - C. $9\text{ cm } 1\text{ mm} + 1\text{ cm } 9\text{ mm} = ?$
 - I. 10 cm
 - II. 11 cm 1 mm
 - III. 11 cm
 - IV. 10 cm 9 mm
 - D. $1\text{ l } 450\text{ml} + 11\text{ l } 550\text{ml} = ?$
 - I. 13 l
 - II. 12 l 500 ml
 - III. 12 l
 - IV. 13 l 500 ml
2. Fill in the blanks.
 - a. $43\text{ kg} = \underline{\hspace{2cm}}\text{ g}$
 - b. $250\text{ ml} = \underline{\hspace{2cm}}\text{ l}$.
 - c. We use centimeters and meters to measure _____.
 - d. 1 litre is equal to _____ml.
3. Kiran weighs 20 kg 850 g. Vimal weighs 12 kg 200 g more than Kiran. Find the total weight.
4. Rohan sold 48 kg 350 g old newspaper, 13 kg 837 g old books, and 8 kg 97 g iron pieces to a kabadi. How much total weight did the kabadi bought from him?

ASSIGNMENT – 3

NAME: - _____

ROLL NO: - _____

A. Add.

1. ₹86.35 and 34.50

3. ₹66.30, ₹24.80 and ₹56.50

2. ₹42.35 and ₹8.45

4. ₹804.20, ₹120.60 and ₹36.85

B. Subtract.

1. ₹205.50-85.20

2. ₹486.90-₹255.50

3. ₹798.50-₹30, 85

C. Multiply.

1. 265.5×5

2. 7218.83×7

3. 326.5×10

D. Divide.

1. $235.2 \div 7$

2. $394.2 \div 9$

3. $2585.6 \div 16$

E. Fill in the blanks.

1. 3 sharpeners cost 12. The cost of 1 sharpener will be _____

2. If the cost of 5 L milk is 125, the cost of 2 L milk will be _____

3. If 36 is paid for 4 apples, ₹72 will be paid for _____ apples.

4. If 50 kg rice costs ₹2000, then for 600 Gopi can buy _____ kg rice.

5. 8 notebooks cost ₹40. _____ such notebooks will cost ₹20.

F. Solve these story sums.

1. Which is a better buy?

a. 7 oranges for ₹91.

b. 5 oranges for ₹70.

2. What will be the cost of 5 kg grapes if 2kg grapes cost 100?

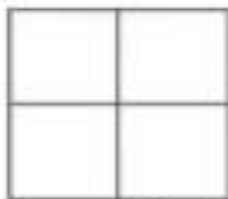
ASSIGNMENT - 4

NAME: - _____

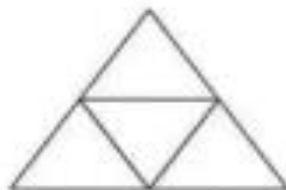
ROLL NO: - _____

Fraction Worksheet

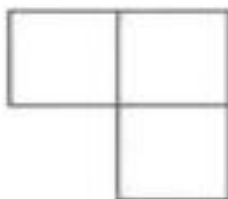
Color parts of each shape



Color $\frac{1}{4}$



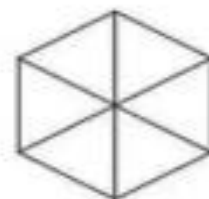
Color $\frac{1}{4}$




Color $\frac{1}{3}$



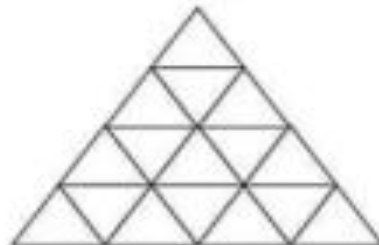
Color $\frac{3}{6}$



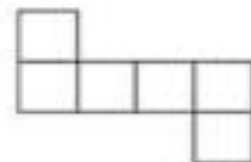
Color $\frac{1}{6}$



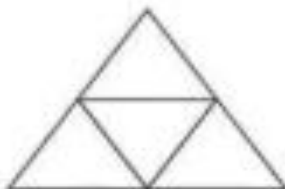
Color $\frac{5}{12}$



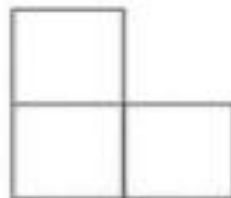
Color $\frac{9}{16}$



Color $\frac{2}{6}$



Color $\frac{3}{4}$



Color $\frac{2}{3}$




Color $\frac{4}{5}$

ASSIGNMENT - 5


NAME: - _____

ROLL NO: - _____

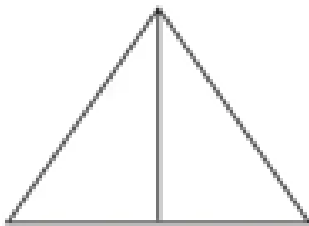
Color the shape as fractions given below



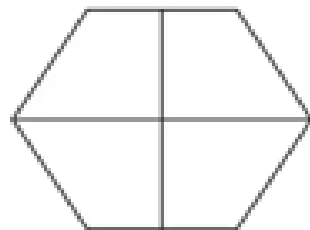
color $\frac{1}{4}$



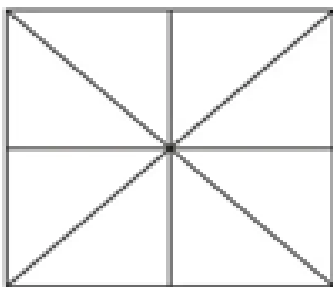
color $\frac{2}{3}$



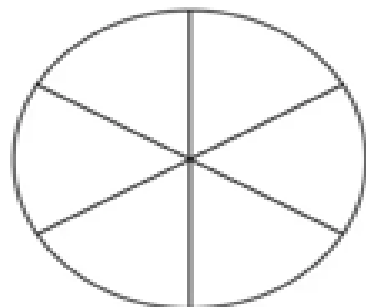
color $\frac{1}{2}$



color $\frac{3}{4}$



color $\frac{5}{8}$



color $\frac{3}{6}$ or $\frac{1}{2}$

ENVIRONMENTAL STUDIES:

Q1. Learn Chapter no. 14 to 16.

Q2. Short Answer Questions.

- a) What is the air we breathe made up of?
- b) Why is oxygen important for us?
- c) What is pollution, and how does it affect the air we breathe?
- d) How can we keep the air we breathe clean?

Q3. Long Questions

- a) Describe the importance of air in our daily lives.
- b) What are the different ways in which air gets polluted, and how can we prevent it?

Q4. Fill in the Blanks

- a) The air we breathe is essential for our _____.
- b) Trees help keep the air clean by releasing _____.
- c) We should not burn plastics and other harmful substances because they release _____ gases.

Q5. True or False

- a) We can live without air.
- b) Plants release carbon dioxide during photosynthesis.

Q6. Draw and label.

- a) Make a chart paper on a plant and label its different parts.

GENERAL KNOWLEDGE:

ASSIGNMENT

Q1 Multiple Choice Questions

1) India's longest river bridge will be constructed on river Brahmaputra (around 19 km long), connecting ___ & ___

- a. Assam and Arunachal Pradesh
- b. Assam and Tripura
- c. Assam and West Bengal
- d. Assam and Meghalaya

2) High Speed trains named Shinkansen belongs to ___

- a. China
- b. Japan
- c. South Korea
- d. France

3) ___ was the recent cyclone that hit the city of Chennai.

- a. Nivar
- b. Katrina
- c. Goni
- d. Laura

4) South Asian Association for Regional Cooperation (SAARC) was established in the year ____

- a. 1985
- b. 1990
- c. 1995
- d. None of the above

5) Capital of Bhutan is ___

- a. Kathmandu
- b. Thimphu
- c. Bangkok
- d. Hanoi

6) ___ is known as the Land of the Blue Sky

- a. Mongolia
- b. Japan
- c. Germany
- d. Russia

7) Xi Jinping is the president of ___

- a. Japan
- b. North Korea
- c. Thailand
- d. China

8) ___ is measured using the Richter scale.

- a. Volcanic eruptions
- b. Typhoons
- c. Earthquakes
- d. Landslides

9) Coco Islands is located in _____

- a. Bay of Bengal
- b. Arabian Sea
- c. Indian Ocean
- d. Red Sea

10) Vikram Sarabhai Space Centre is located in ___

- a. Trivandrum
- b. Hyderabad
- c. Kolkata
- d. New Delhi

11) Midnight's Children is a famous book written by ___

- a. Salman Rushdie
- b. V S Naipaul
- c. Arvind Adiga
- d. Kiran Desai

12) _____ is a long range missile developed by Defense Research and Development Organisation (DRDO)

- a. PSLV
- b. GSLV
- c. Agni
- d. Akash

13) ___ was the first human to go to Space

- a. Buzz Aldrin
- b. Yuri Gagarin
- c. Neil Armstrong
- d. None of the above

14) ___ is the deepest lake in the world.

- a. Lake Baikal
- b. Lake Vostok
- c. Lake Nyasa
- d. None of the above

15) _____ is the current Chief of Indian Air Force

- a. Bipin Rawat
- b. Manoj Mukund Naravane

c. Rakesh Kumar Bhadauria

d. Karambir Singh

Q2. Answer the following

1. Who was the first President of India?
2. What is the name of the festival of colors?
3. Who wrote the book "The Tale of the Tiger"?
4. What is the capital of India? Which is the largest state in India?
5. What is the name of the highest mountain peak in India?
6. What is the process called when plants make their own food?
7. Who is the father of geometry?
8. What is the largest planet in our solar system?
9. Which cricketer is known as God of cricket?

COMPUTER:

Q1. Create a presentation on the topic '**Go Green**' (10 slides)

Q2. Make a bookmark on different internet browsers.

